

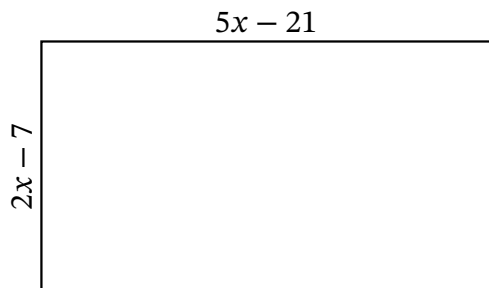
Algebra Rectangles (A)

Name: _____

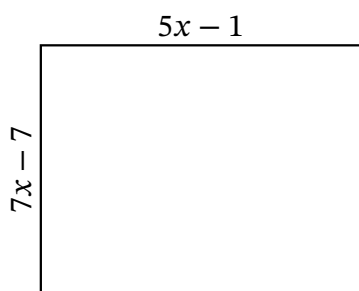
Date: _____

Score: _____

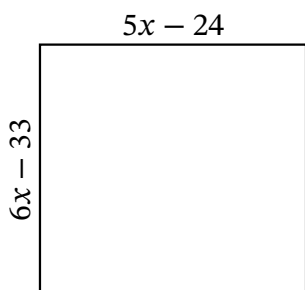
Determine the Value of x , Length, Width and Area for each rectangle.



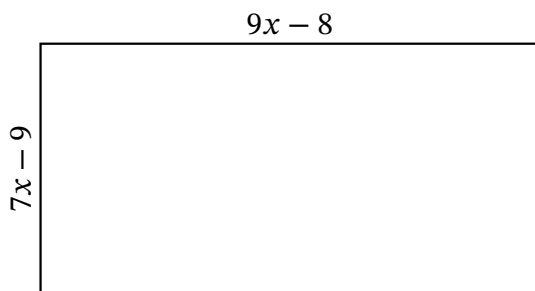
Perimeter: nm
Value of x : nm
Length: nm
Width: nm
Area: nm^2



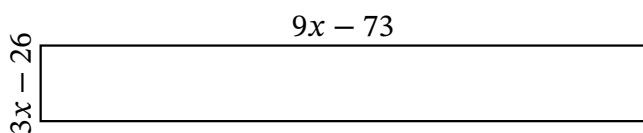
Perimeter: cm
Value of x : cm
Length: cm
Width: cm
Area: cm^2



Perimeter: μm
Value of x : μm
Length: μm
Width: μm
Area: μm^2



Perimeter: mm
Value of x : mm
Length: mm
Width: mm
Area: mm^2



Perimeter: yd
Value of x : yd
Length: yd
Width: yd
Area: yd^2

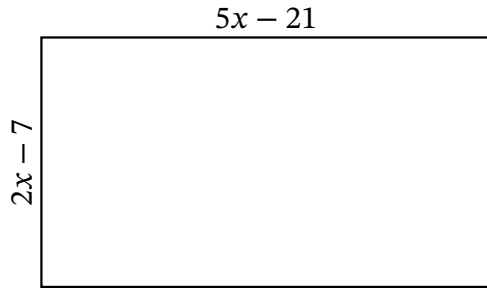
Algebra Rectangles (A) Answers

Name: _____

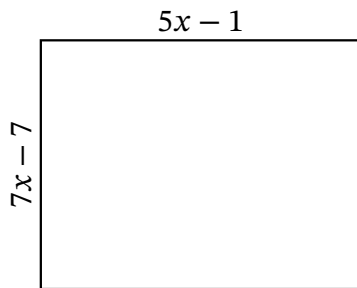
Date: _____

Score: _____

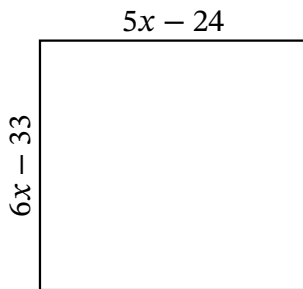
Determine the Value of x , Length, Width and Area for each rectangle.



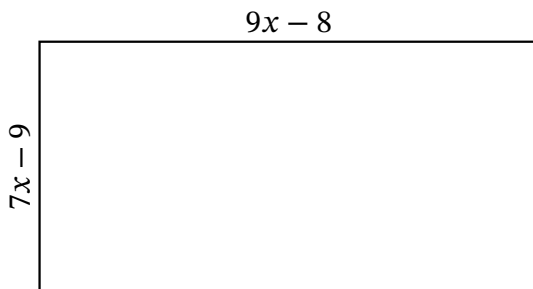
Perimeter: nm
Value of x : nm
Length: nm
Width: nm
Area: nm^2



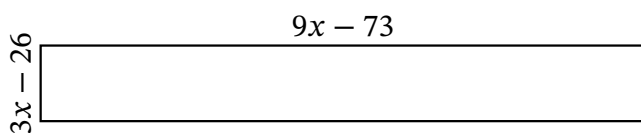
Perimeter: cm
Value of x : cm
Length: cm
Width: cm
Area: cm^2



Perimeter: μm
Value of x : μm
Length: μm
Width: μm
Area: μm^2



Perimeter: mm
Value of x : mm
Length: mm
Width: mm
Area: mm^2



Perimeter: yd
Value of x : yd
Length: yd
Width: yd
Area: yd^2