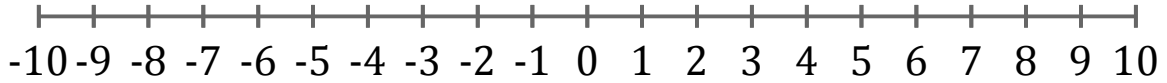


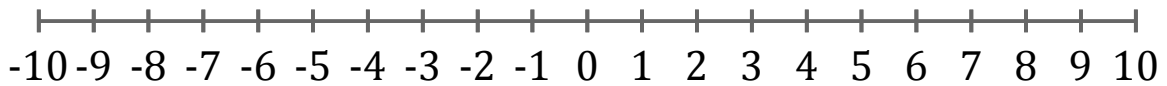
Graphing Inequalities (A)

Graph each inequality on a number line.

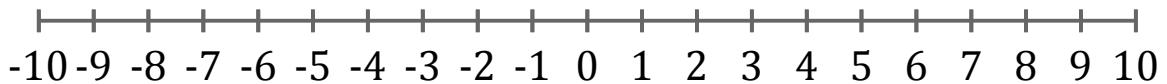
1. $x < 1$



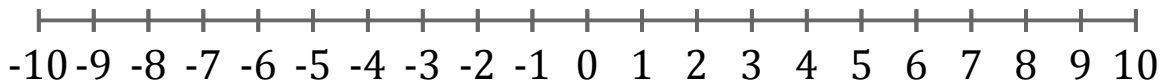
2. $x \geq -6$



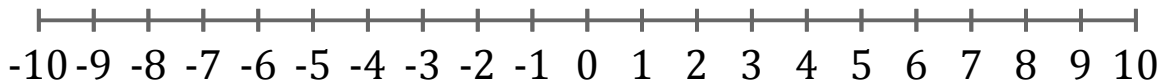
3. $x \geq 4$



4. $x \geq 8$



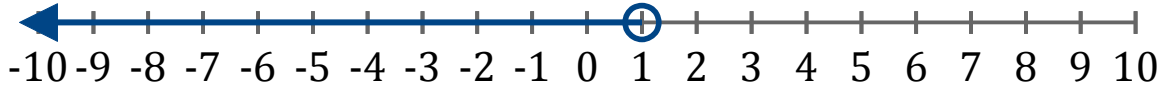
5. $x \leq 1$



Graphing Inequalities (A) Answers

Graph each inequality on a number line.

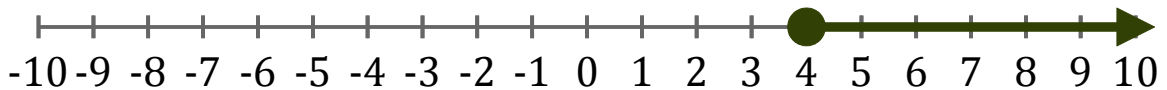
1. $x < 1$



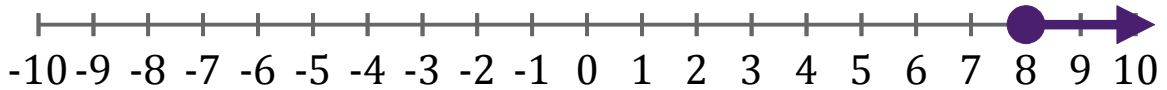
2. $x \geq -6$



3. $x \geq 4$



4. $x \geq 8$



5. $x \leq 1$

