

















# Percentage Increase/Decrease (A)

Name: \_\_\_\_\_

Date: \_\_\_\_\_

Calculate the percentage increase or decrease.

|       | Original Amount |   | New Amount | Increase or Decrease  | Percentage Change |
|-------|-----------------|---|------------|---|-------------------|
| 1.    | 990             | → | 396        |       |                   |
| ----- |                 |   |            |   |                   |
| 2.    | 830             | → | 249        |       |                   |
| ----- |                 |   |            |   |                   |
| 3.    | 980             | → | 147        |       |                   |
| ----- |                 |   |            |   |                   |
| 4.    | 165             | → | 33         |     |                   |
| ----- |                 |   |            |   |                   |
| 5.    | 640             | → | 512        |   |                   |
| ----- |                 |   |            |   |                   |
| 6.    | 520             | → | 598        |   |                   |
| ----- |                 |   |            |   |                   |
| 7.    | 520             | → | 546        |   |                   |
| ----- |                 |   |            |   |                   |
| 8.    | 930             | → | 1023       |   |                   |
| ----- |                 |   |            |   |                   |
| 9.    | 940             | → | 1551       |   |                   |
| ----- |                 |   |            |   |                   |
| 10.   | 286             | → | 429        |   |                   |
| ----- |                 |   |            |   |                   |